



KS2 SATS Parents Meeting

Week beginning:
Monday 8th May 2017

Agenda

- Tests and dates
- Reporting to parents
- Help at home
- On the day
- CPG SATS help books for sale

Reading Paper (1 hour)

Monday 8th May 2017

4 Look at the paragraph beginning: Oliver rowed...

Find and copy one word that suggests that the summer afternoon was quiet.

1 mark

5 ...they crossed the glassy surface of the lake.

Give two impressions this gives you of the water.

1. _____

2. _____

2 marks

6 Look at the paragraph beginning: *The tiny island...* to the paragraph ending: *...were cut into it.*

What impressions of the island do you get from these two paragraphs?

Give two.

1. _____

2. _____

2 marks

7 Write down three things that you are told about the oak tree on the island.

1. _____

2. _____

3. _____

3 marks



Dawn was casting spun-gold threads across a rosy sky over Sawubona Game Reserve as Martine Allen took a last look around to ensure there weren't any witnesses. She leaned forward like a jockey on the track, wound her fingers through a silver mane, and cried, 'Go, Jemmy, go.'

The white giraffe sprang forward so suddenly that she was almost unseated, but she recovered and, wrapping her arms around his neck, quickly adjusted to the familiar rhythm of Jemmy's rocking-horse stride. They swept past the dam and a herd of bubble-blowing hippos, past a flock of startled egrets lifting from the trees like white glitter, and out onto the open savannah plain. An early morning African chorus of doves, crickets and go-away birds provided a soundtrack.



Grammar, Punctuation and Spelling (GPS) (45mins + 20mins spelling) Tuesday 9th May 2017

6 Which sentence uses the **colon** correctly?

Tick **one**.

I bought several beach toys a bucket: a spade a ball and a kite.

I bought several beach toys a: bucket, a spade, a ball and a kite.

I bought several beach toys: a bucket, a spade, a ball and a kite.

I bought several: beach toys, a bucket, a spade, a ball and a kite.

43 Tick the option which shows how the underlined words in the sentence below are used.

The insect-eating Venus flytrap is a carnivorous plant.

Tick **one**.

as a main clause

as a fronted adverbial

as a subordinate clause

as a noun phrase

10

Tick one box in each row to show if the sentence is in the **present progressive** or the **past progressive**.

Sentence	Present progressive	Past progressive
Joey was playing football in the park after school.	<input type="checkbox"/>	<input type="checkbox"/>
Joey's football skills are improving all the time.	<input type="checkbox"/>	<input type="checkbox"/>
Joey is hoping to be a professional footballer.	<input type="checkbox"/>	<input type="checkbox"/>

Maths Paper 1: Arithmetic (30mins)

Maths Paper 2: Reasoning (45mins)

Wednesday 10th May 2017

7 $89,994 + 7,643 =$

1 mar

8 $= 435 - 30$

1 mar

9 $96 \div 4 =$

12

$n = 22$

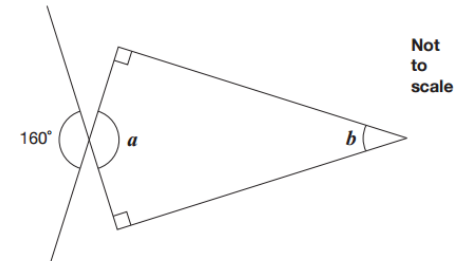
What is $2n + 9$?

$2q + 4 = 100$

Work out the value of q .

$q =$

Calculate the size of angles a and b in this diagram.



$a =$ $^{\circ}$

1 mark


$b =$ $^{\circ}$

1 mark

Maths Paper 3: Reasoning (45mins)

Thursday 11th May 2017

3 A clock shows this time twice a day.



Tick the two digital clocks that show this time.

03:45

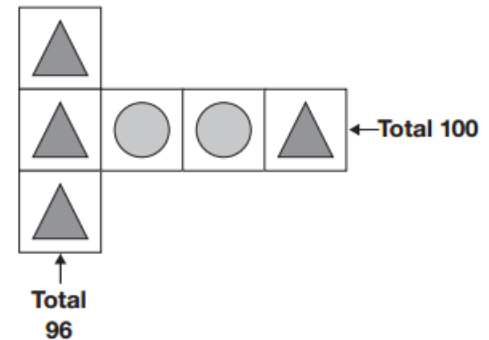
02:45

09:45

21:45

14:45

4 Each shape stands for a number.



Work out the value of each shape.

$$\triangle = \underline{\hspace{2cm}}$$

$$\circ = \underline{\hspace{2cm}}$$

$$5,542 \div 17 = 326$$

Explain how you can use this fact to find the answer to 18×326

Science & Writing

- Both are teacher assessed
- There will be *no* science sampling testing this year

On the day!

- Come to school at 8:15am for a special Year 6 SATS breakfast provided by the school (juice, milk, croissants, cereal bars, fruit and yogurt)
- 8:45 registration as normal
- A quick revision session will be held in the morning to warm the brains up
- Children will have small bottles of water at their tables

Reporting to parents

- **Tuesday July 4th** - School can review KS2 SATS papers and scores; children will be told their score in a 1:1 meeting by their class teacher; parents will be informed of the results by a letter home that day
 - **Parents will be told:**
 - Score (100 = at expected standard; last year 110 = a high score)
 - Whether or not your child has met the standard
 - Outcomes of teacher assessments in writing, science, maths and reading
 - Where appropriate, a statement explaining why your child did not sit the test
- **Please note, you will also receive a full end of year report later in July

Study books for sale



Maths bundle (workbooks) - £4.50

English bundle (workbooks)- £4.50

(RRP £10)



Thank you!

Questions

